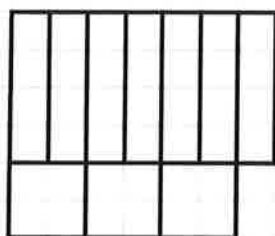
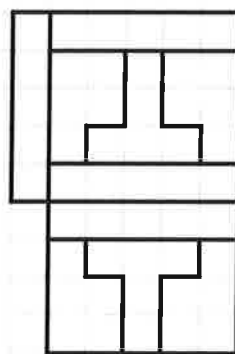


1

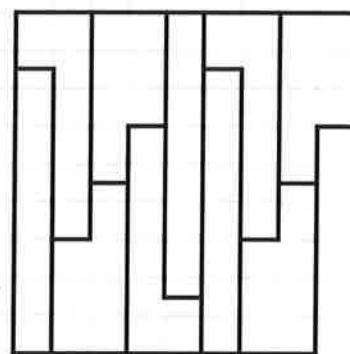
Hvørji bítistykki vísa skapini?



$$\overline{10} =$$



$$\overline{10} =$$



$$\overline{10} =$$

2

$$(48+6) : 6 =$$

$$(38+18) : 8 =$$

$$\begin{array}{ccc} 4 & 9 & 7 \end{array}$$

$$(60-4) : 7 =$$

$$(60-15) : 5 =$$

$$\begin{array}{ccc} 6 & 4 & 2 \end{array}$$

$$(13+17) : 5 =$$

$$(40-12) : 7 =$$

$$\begin{array}{ccc} 5 & 3 & 5 \end{array}$$

$$(42-6) : 9 =$$

$$(27+27) : 9 =$$

$$\begin{array}{ccc} 8 & 9 & 6 \end{array}$$

3

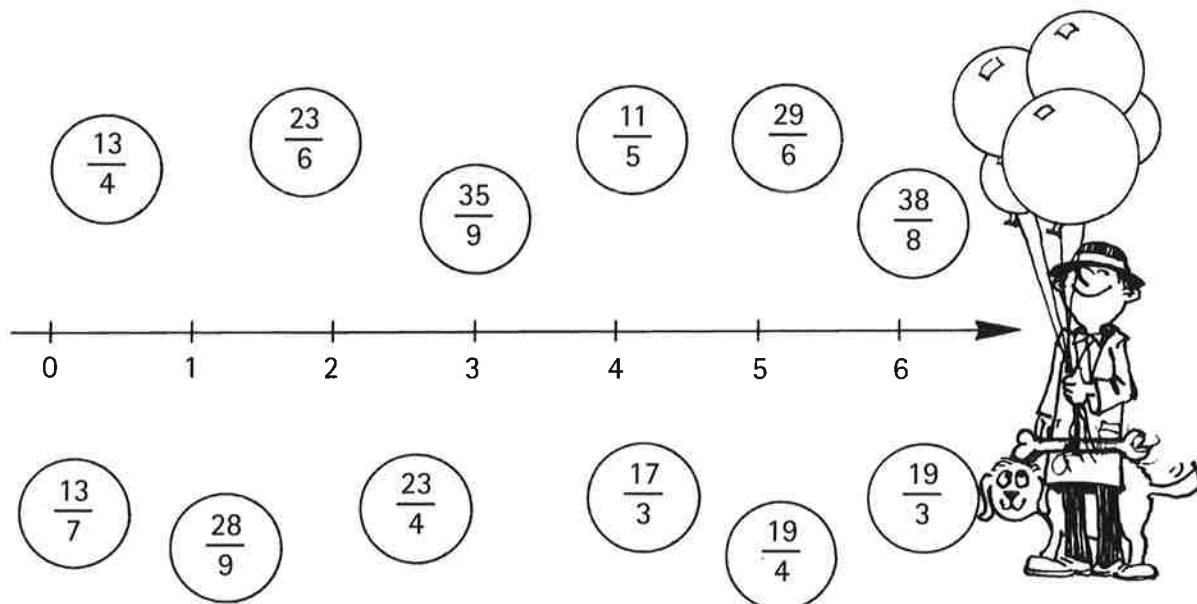
Trý heil tøl verða faldað hvørt við øðrum.

Úrslitið verður 105.

Hvørji eru tey trý tølini? _____


4

Tekna eina striku til næsta heila tal.



1

Tekna strikur niður til tann rætta puntin.



$x < 4$

$x = 4$

$x > 4$

2

$495 : 3 =$	$695 : 5 =$	$120 : 10 =$	139	124	118	127
$1016 : 8 =$	$603 : 9 =$	$1240 : 10 =$	174	86	191	184
$1176 : 6 =$	$896 : 7 =$	$890 : 10 =$	89	165	63	12
$736 : 4 =$	$1568 : 8 =$	$630 : 10 =$	196	128	67	196

3

$\frac{40}{10} =$	$\frac{30}{10} =$	$\frac{50}{10} =$	$3,6$	$5,8$	$4,5$
$\frac{45}{10} =$	$\frac{36}{10} =$	$\frac{58}{10} =$	$0,45$	30	45
$\frac{4,5}{10} =$	$\frac{3,6}{10} =$	$\frac{5,8}{10} =$	$5,0$	$0,58$	58
			$0,36$	$4,0$	$3,0$

4

$\frac{475}{100} =$	$\frac{582}{100} =$	$\frac{1238}{100} =$	$0,05$	$0,47$	$5,82$
$\frac{47}{100} =$	$\frac{58}{100} =$	$\frac{123}{100} =$	$123,8$	$0,582$	$5,8$
$\frac{4}{100} =$	$\frac{5}{100} =$	$\frac{12}{100} =$	$12,38$	$0,12$	$0,58$
			$0,04$	$1,23$	$4,75$